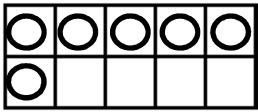


Prénom : .....

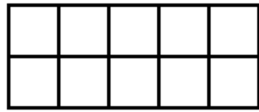
Date : .....

# L'ADDITION

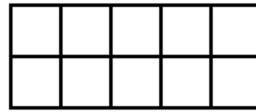
1- Calcule avec la méthode des quantités.



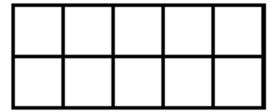
$4 + 2 = \dots$



$6 + 3 = \dots$



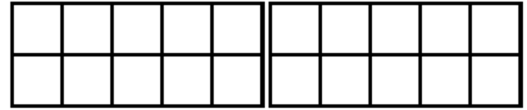
$5 + 0 = \dots$



$2 + 6 = \dots$



$8 + 5 = \dots$

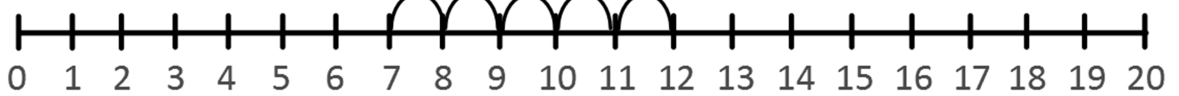


$4 + 7 = \dots$

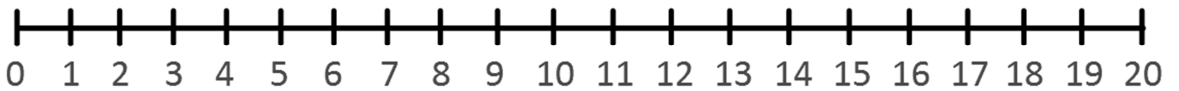
2- Calcule avec la méthode des bonds.



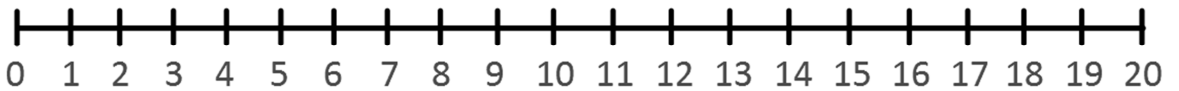
$7 + 5 = 12$



$4 + 3 = \dots$



$9 + 6 = \dots$



3- Calcule avec la méthode de ton choix.



\_\_\_\_\_

$6 + 1 = \dots$

\_\_\_\_\_

$7 + 3 = \dots$

\_\_\_\_\_

$8 + 6 = \dots$

**RÉVISIONS** Repasse les nombres au feutre ou au crayon de couleur.

