





Prénom : .....

Date : .....

# LES NOMBRES DE 60 À 100

1- **Colorie** de la **même couleur** les yeux des robots qui portent le **même nombre**.



2- **Écris** en chiffres.

quatre-vingts .....

quatre-vingt-douze .....


quatre-vingt-trois .....

quatre-vingt-dix .....


quatre-vingt-huit .....

quatre-vingt-dix-sept .....


3- **Écris** le nombre de cubes.




|   |   |
|---|---|
| D | U |
| . | . |



|   |   |
|---|---|
| D | U |
| . | . |




|   |   |
|---|---|
| D | U |
| . | . |



|   |   |
|---|---|
| D | U |
| . | . |

4- **Dessine** comme dans l'exemple.



76

81

97

90