


Prénom :

Date :

CE QUI FAIT 10

1- Complète à 10.



10 ballons



10 bonbons



10 planètes

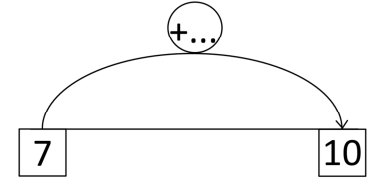
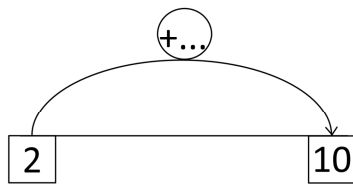
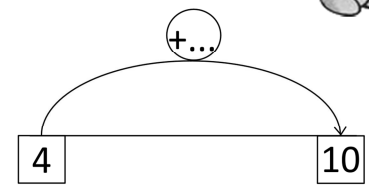
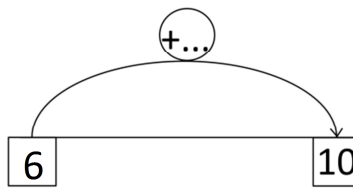


10 poires

2- Relie les nombres qui font 10.

- | | |
|-----|------|
| 0 ● | ● 5 |
| 1 ● | ● 6 |
| 2 ● | ● 7 |
| 3 ● | ● 8 |
| 4 ● | ● 9 |
| 5 ● | ● 10 |

3- Dessine les bonds du lapin et complète.



4- Complète.

5 + = 10

.... + 1 = 10

3 + = 10

.... + 2 = 10

8 + = 10

.... + 7 = 10

4 + = 10

.... + 0 = 10

5- Dessine toutes les flèches restantes pour obtenir 10.

