

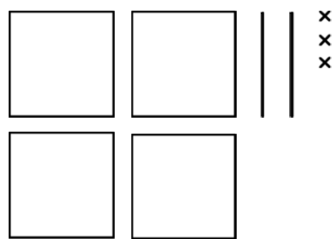
Prénom :

Date :

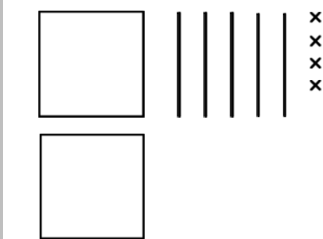
LES CENTAINES (2)



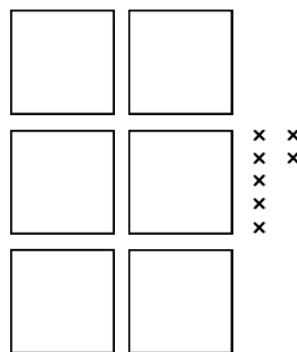
1- Complète comme dans l'exemple.



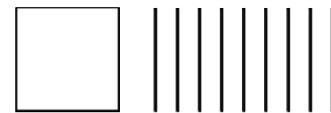
$400 + 20 + 3 = 423$



.....



.....



.....

2- Écris les résultats des additions.

$500 + 20 + 1 = \dots$

$300 + 40 = \dots$

$60 + 100 + 2 = \dots$

$800 + 10 + 3 = \dots$


$90 + 4 = \dots$

$8 + 30 + 200 = \dots$

$900 + 70 + 9 = \dots$

$400 + 6 = \dots$

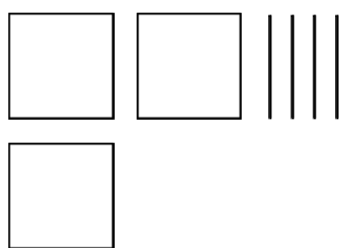
$10 + 5 + 800 = \dots$



3- Complète les dessins pour avoir la bonne quantité.



129



580



615



407

4- Complète le tableau.

| | | | |
|-------|----------------|---------------------------------|--|
| 236 | $200 + 30 + 6$ | $100 + 100 + 10 + 10 + 10 + 6$ | |
| 154 | | | |
| | | $100 + 100 + 100 + 10 + 10 + 5$ | |
| | $200 + 10 + 3$ | | |