

Prénom : .....

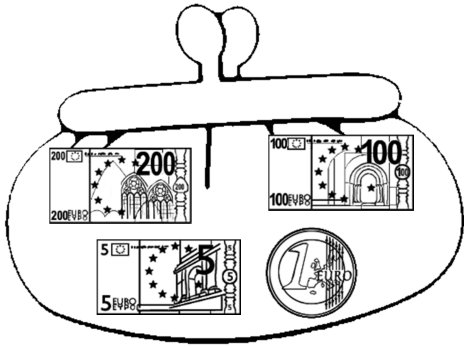
Date : .....

# LA MONNAIE (2)

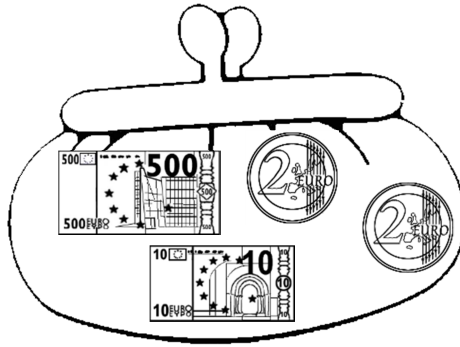
## Les pièces et les billets



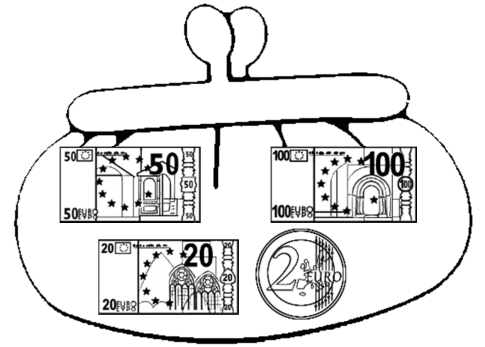
1- **Écris** la somme que contient chaque porte-monnaie.



..... €

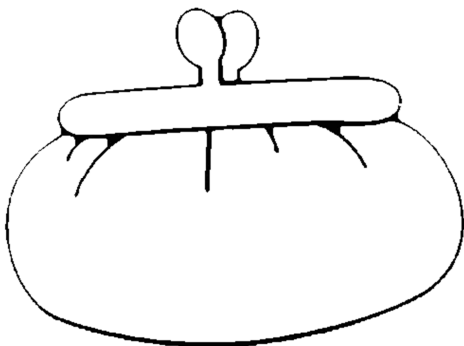


..... €

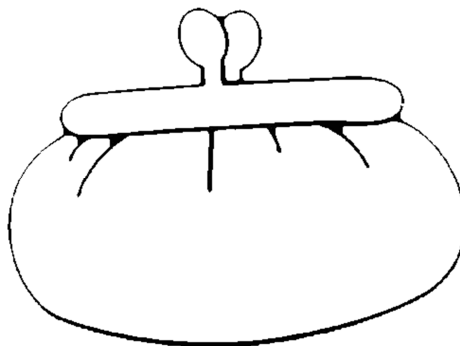


..... €

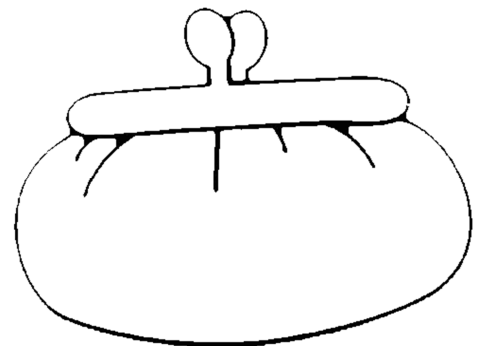
2- **Dessine** la somme que contient chaque porte-monnaie.



351 €



524 €



175 €

3- **Dessine** des pièces et des billets pour acheter l'objet.

Essaie d'en dessiner le moins possible.

