

Prénom : .....

Date : .....

# AJOUTER 10, 20, 30...

## 1- Complète les dessins et les additions.



D	U
2	3

 $+ 10 =$ 

D	U
.	.



x  
x  
x

D	U
3	5

 $+ 20 =$ 

D	U
.	.




x  
x  
x  
x  
x

D	U
5	8

 $+ 30 =$ 

D	U
.	.



x x  
x x  
x x  
x  
x

D	U
4	6

 $+ 40 =$ 

D	U
.	.

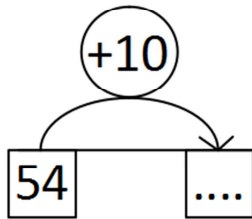


x x  
x  
x  
x  
x

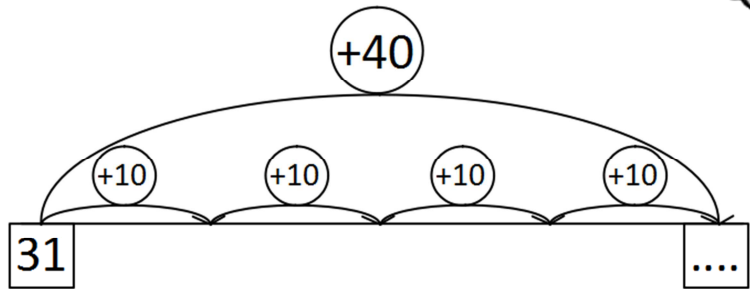
## 2- Complète. Tu peux t'aider du tableau des nombres.



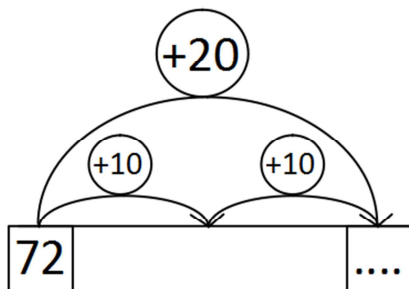
$54 + 10 = \dots$



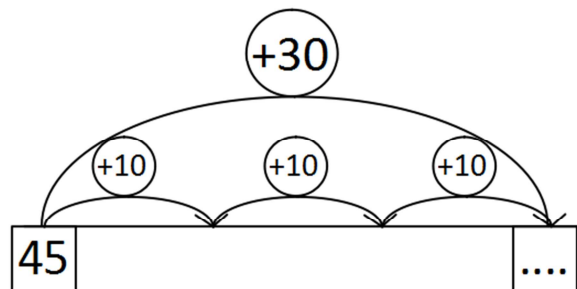
$31 + 40 = \dots$



$72 + 20 = \dots$



$45 + 30 = \dots$



## 3- Écris les résultats des additions. Dessine la méthode que tu as utilisée.



$10 + 37 = \dots$

\_\_\_\_\_

$64 + 20 = \dots$

\_\_\_\_\_

$25 + 40 = \dots$

\_\_\_\_\_