

Prénom : .....

Date : .....

# RETIRER 10, 20, 30...

1- **Barre** ce que tu enlèves et **complète** les soustractions.



D	U
4	6

 $- 10 =$ 

D	U
.	.



D	U
5	5

 $- 20 =$ 


D	U
.	.



D	U
7	4

 $- 30 =$ 


D	U
.	.



D	U
9	1

 $- 40 =$ 

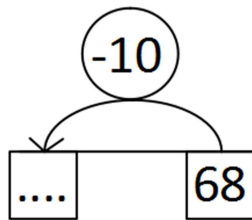
D	U
.	.



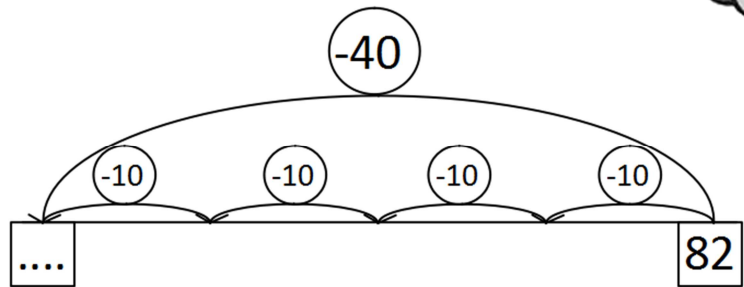
2- **Complète.** Tu peux t'aider du tableau des nombres.



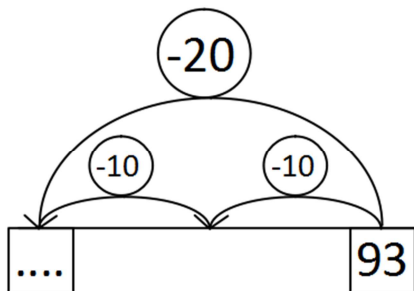
$68 - 10 = \dots$



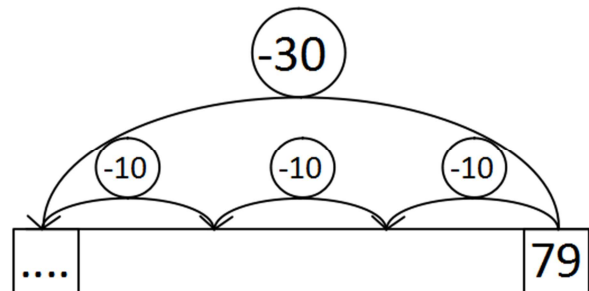
$82 - 40 = \dots$



$93 - 20 = \dots$



$79 - 30 = \dots$



3- **Écris** les résultats des soustractions. **Dessine** la méthode que tu as utilisée.



$64 - 20 = \dots$

\_\_\_\_\_

$85 - 40 = \dots$

\_\_\_\_\_

$97 - 30 = \dots$

\_\_\_\_\_