

Prénom :

Date :

LA MONNAIE (3)


Les centimes (100 centimes = 1 euro)




Les euros




1- Fais des paquets de 1 € et écris la somme que contient chaque porte-monnaie.



..... € c

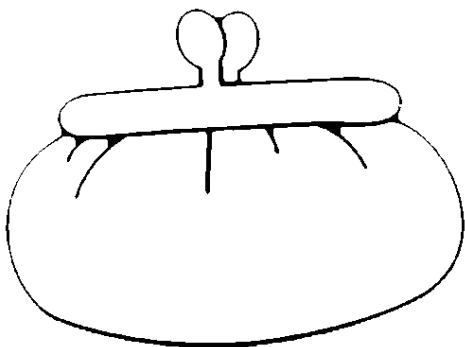


..... € c

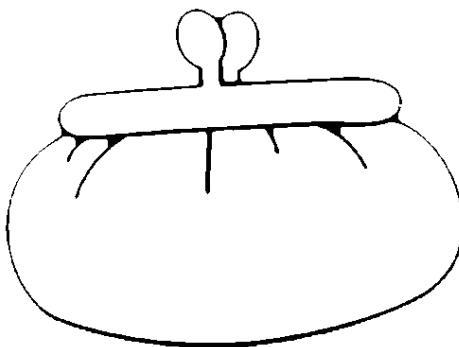


..... € c

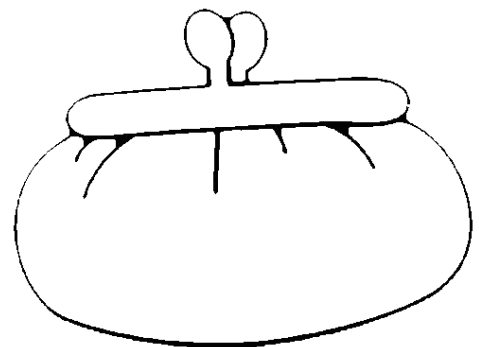
2- Dessine la somme que contient chaque porte-monnaie.



1 € 75 c



0 € 94 c



2 € 36 c

3- Dessine des pièces et des billets pour acheter l'objet.

Essaye d'en dessiner le moins possible.

