

Prénom :

Date :

L'ADDITION (4) (aller à la dizaine supérieure ou inférieure)

1- Complète les additions.

Entoure les résultats que tu connais par cœur.

$1 + \dots = 10$

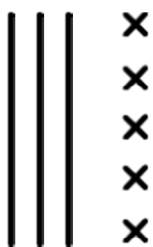
$2 + \dots = 10$

$3 + \dots = 10$

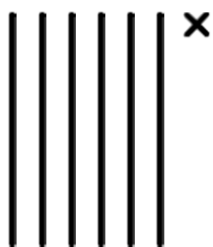
$4 + \dots = 10$

$5 + \dots = 10$

2- Complète le dessin et le calcul.



$35 + \dots = 40$



$61 + \dots = 70$



$27 + \dots = 30$

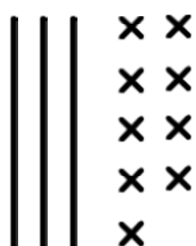


$43 + \dots = 50$

3- Barre ce que tu enlèves et complète le calcul.




$58 - \dots = 50$



$39 - \dots = 30$

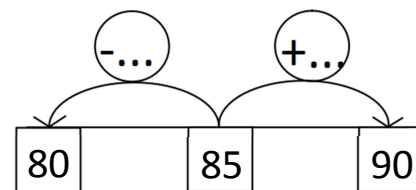
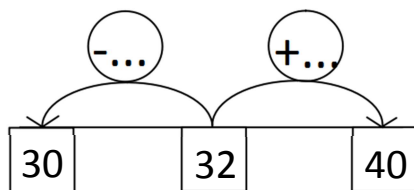
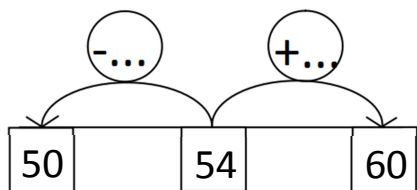
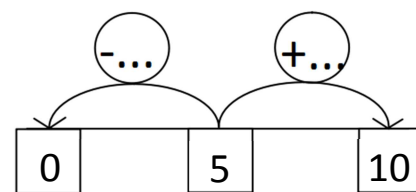
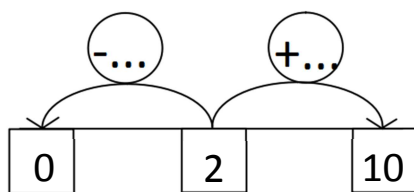
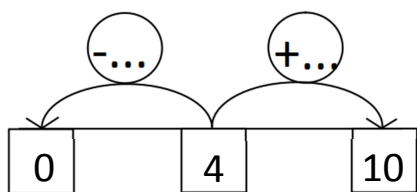


$46 - \dots = 40$



$87 - \dots = 80$

4- Complète.



5- Complète les additions et les soustractions.

Entoure les résultats que tu connais par cœur.

$48 + \dots = 50$

$82 + \dots = 90$

$23 + \dots = 30$

$51 + \dots = 60$

$75 - \dots = 70$

$39 - \dots = 30$

$17 - \dots = 10$

$96 - \dots = 90$

