

Prénom : .....

Date : .....

# L'ADDITION (5) (à l'aide des tables)

## 1- Calcule avec la méthode des bonds.



$$5 + 3 = \dots$$

$$145 + 3 = \dots$$

$$375 + 3 = \dots$$

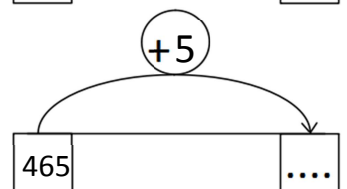
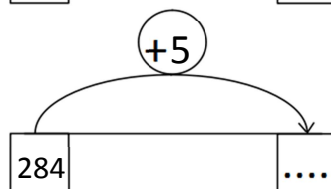
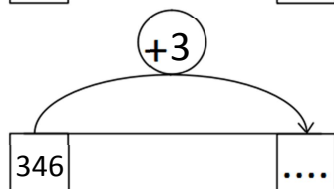
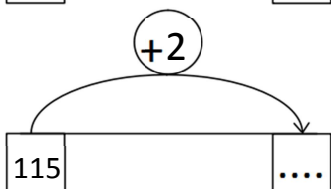
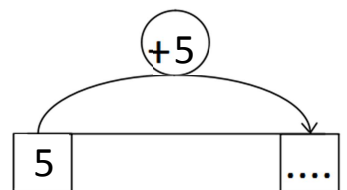
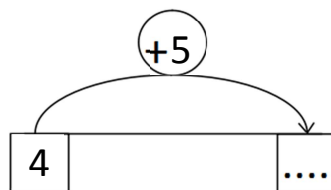
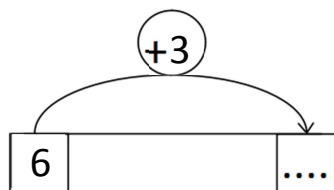
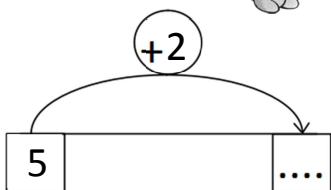
$$205 + 3 = \dots$$

## 2- Écris des calculs que tu peux faire en t'aidant du premier.



$5 + 4 = 9$  .....  
 $205 + 4 = 209$  .....  
 $125 + 4 = 129$  .....  
 .....  
 .....  
 .....

## 3- Complète.



## 4- Écris les résultats des additions.

$7 + 2 = \dots \text{ donc } 417 + 2 = \dots$

$5 + 1 = \dots \text{ donc } 395 + 1 = \dots$

$4 + 4 = \dots \text{ donc } 144 + 4 = \dots$

$3 + 5 = \dots \text{ donc } 203 + 5 = \dots$



## RÉVISIONS Trace les figures à la règle.

