

Prénom : .....

Date : .....

# RETIRER 10, 20, 30... (2)

1- **Barre** ce que tu enlèves et **complète** les soustractions.



C	D	U
2	7	3

 $- 20 =$ 

C	D	U
.	.	.

C	D	U
3	0	6

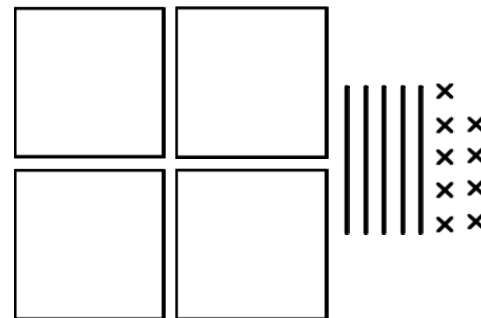
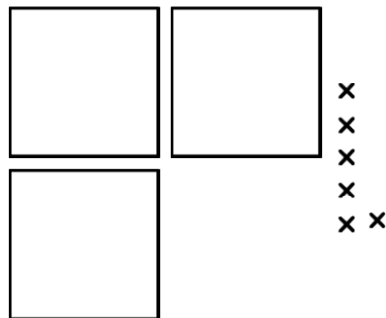
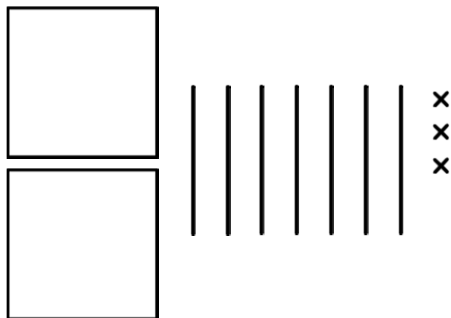
 $- 10 =$ 

C	D	U
.	.	.

C	D	U
4	5	9

 $- 30 =$ 

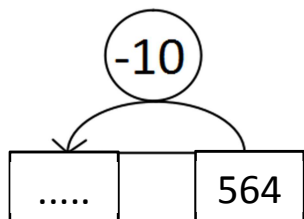
C	D	U
.	.	.



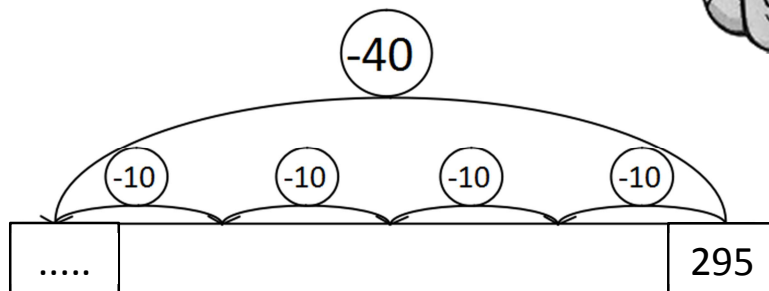
2- **Complète.** Tu peux t'aider du tableau des nombres.



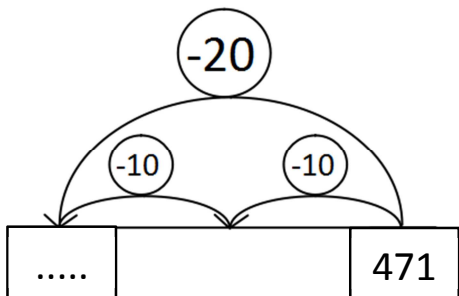
564 - 10 = .....



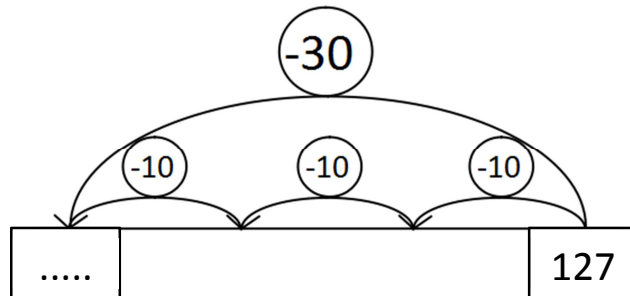
295 - 40 = .....



471 - 20 = .....



127 - 30 = .....



3- **Écris** les résultats des soustractions. **Dessine** la méthode que tu as utilisée.



325 - 20 = .....

\_\_\_\_\_

182 - 40 = .....

\_\_\_\_\_