

Prénom :

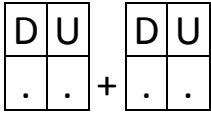
Date :

L'ADDITION (9) (ajouter 10 à 39 à un nombre < 100)

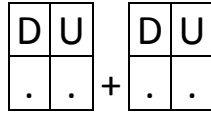
1- Calcule avec la méthode des arbres.



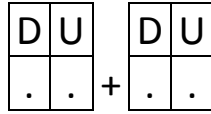
$36 + 23 = \dots$



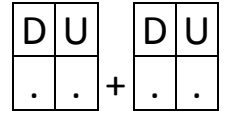
$57 + 15 = \dots$



$45 + 35 = \dots$

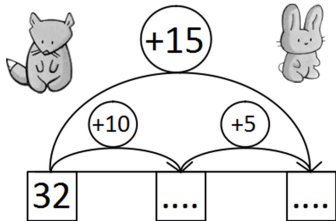


$74 + 29 = \dots$

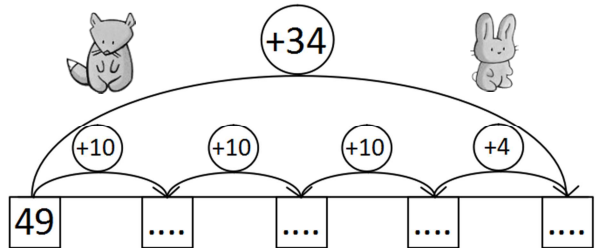


2- Calcule avec la méthode des bonds.

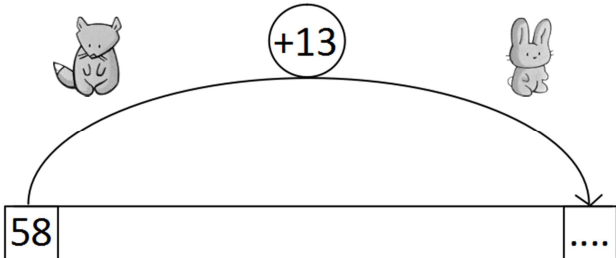
$32 + 15 = \dots$



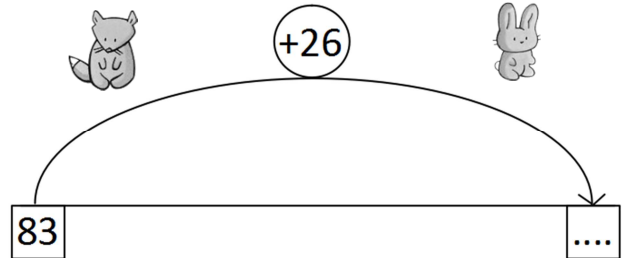
$49 + 34 = \dots$



$58 + 13 = \dots$



$83 + 26 = \dots$



3- Calcule avec la méthode de ton choix.



$65 + 15 = \dots$

$74 + 12 = \dots$

$56 + 28 = \dots$

$78 + 31 = \dots$

RÉVISIONS Trace les axes de symétrie. Attention à l'intrus.

