


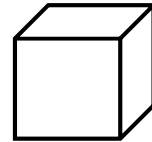
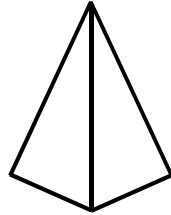

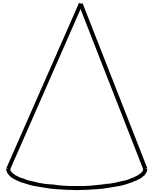
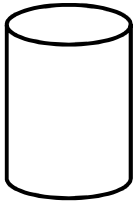
Prénom : .....

Date : .....

# LES SOLIDES

**1- Entoure** les solides qui ne roulent pas.

**Nomme** le **cube** et le **pavé droit**. **Écris** les noms des autres solides si tu les connais.



.....

.....

.....

.....

.....

.....

**2- Relie** chaque objet à son solide.



•

•

•

•

•

•

•


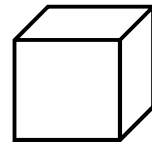

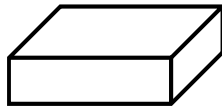
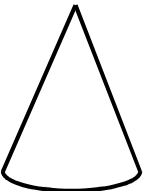
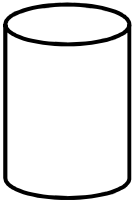
•

•

•

•

•



**3- Dessine** une empreinte de chaque solide.

