

Prénom :

Date :

AJOUTER 10, 20, 30... (2)

1- **Complète** les dessins et les additions.



C	D	U
4	2	1

 $+ 30 =$

C	D	U
.	.	.

C	D	U
3	9	8

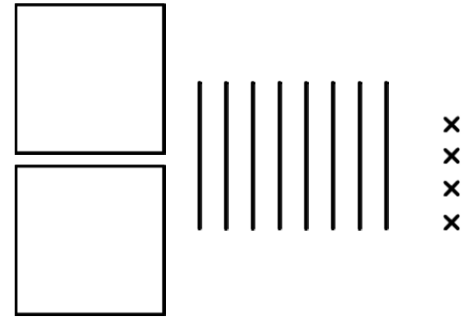
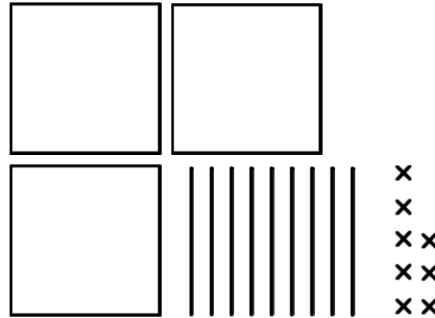
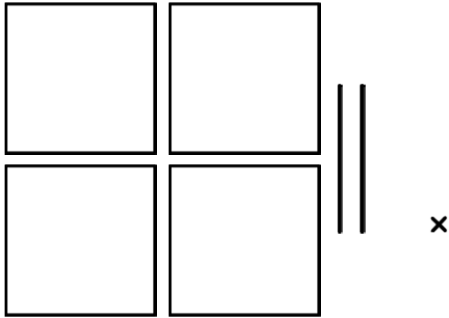
 $+ 10 =$

C	D	U
.	.	.

C	D	U
2	8	4

 $+ 20 =$

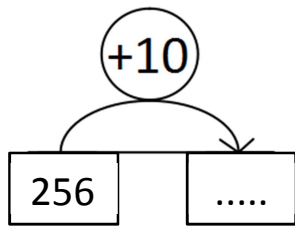
C	D	U
.	.	.



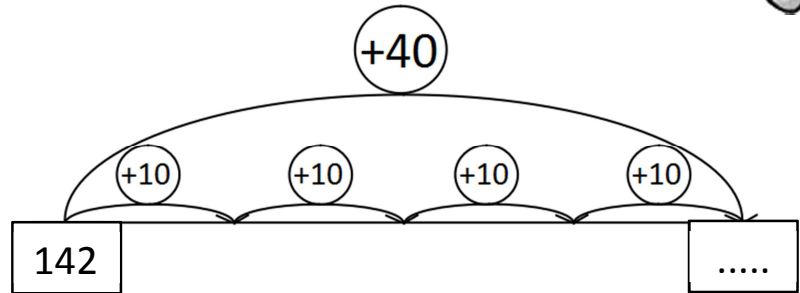
2- **Complète.** Tu peux t'aider du tableau des nombres.



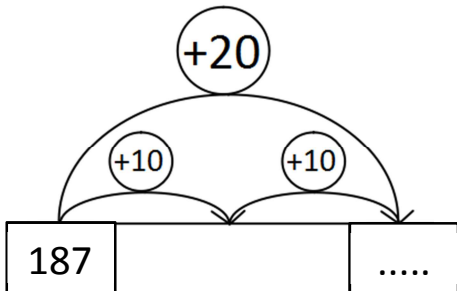
$256 + 10 = \dots$



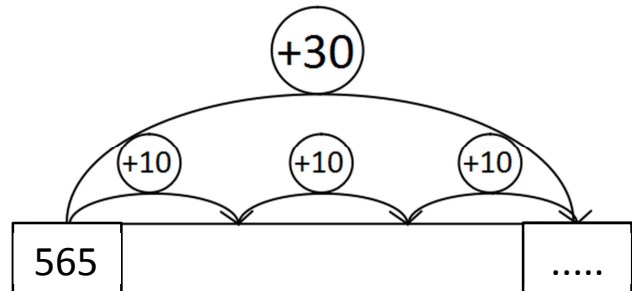
$142 + 40 = \dots$



$187 + 20 = \dots$



$565 + 30 = \dots$



3- **Écris** les résultats des additions. **Dessine** la méthode que tu as utilisée.



$167 + 30 = \dots$

$20 + 259 = \dots$
